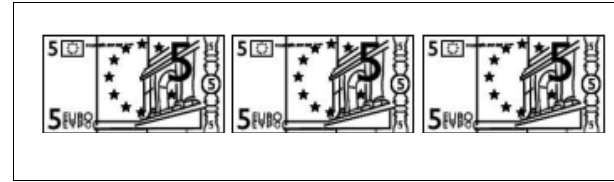


Savoir par cœur

$1 + \dots = 8$
 $2 + \dots = 8$
 $3 + \dots = 8$
 $4 + \dots = 8$
 $5 + \dots = 8$
 $6 + \dots = 8$
 $7 + \dots = 8$

Colorie ce qui fait 15 :





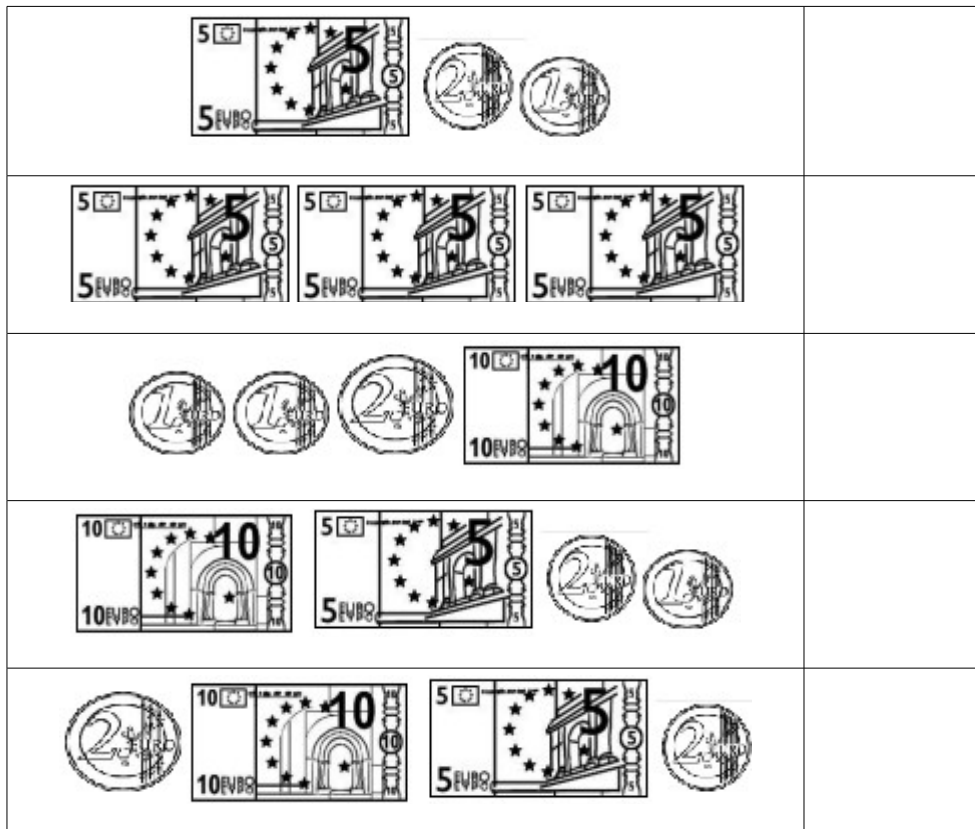
15

Savoir par cœur

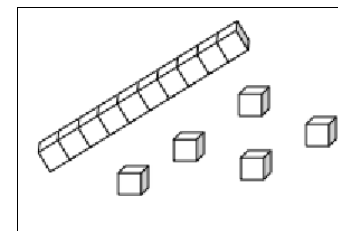
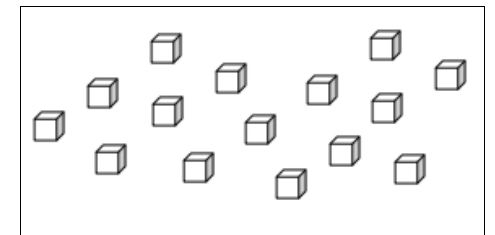
$1 + 2 = \dots$
 $2 + 2 = \dots$
 $3 + 2 = \dots$
 $4 + 2 = \dots$
 $5 + 2 = \dots$
 $6 + 2 = \dots$
 $7 + 2 = \dots$
 $8 + 2 = \dots$
 $9 + 2 = \dots$
 $10 + 2 = \dots$

$10 + 2 + 2$

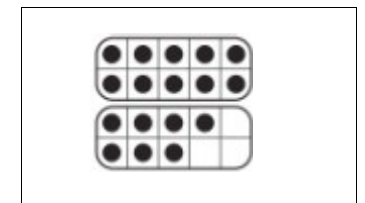
$10 + 5$



$9 + 1 + 4$



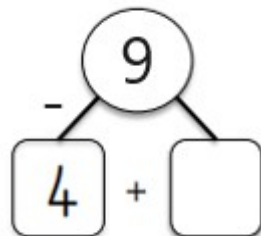
$14 + 1$



● Il y a 9 chats sur le lit. Quatre chats sont roux, les autres sont blancs. Combien y a-t-il de chats blancs ?

$$9 - 4 = \dots$$

$$4 + \dots = 9$$



Savoir par cœur

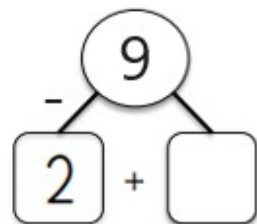
$1 + \dots = 9$
 $2 + \dots = 9$
 $3 + \dots = 9$
 $4 + \dots = 9$
 $5 + \dots = 9$
 $6 + \dots = 9$
 $7 + \dots = 9$
 $8 + \dots = 9$

Il y a ... chats blancs.

● Il y a 9 souris : des blanches et des grises. Il y a 2 souris blanches. Combien y a-t-il de souris grises ?

$$9 - 2 = \dots$$

$$2 + \dots = 9$$



Il y a ... souris grises.

Lire les nombres :

15 _ 20 _ 11 _ 28 _ 30

14 _ 12 _ 9 _ 24 _ 31

13 _ 22 _ 16 _ 35 _ 19

Savoir par cœur

$2 - 2 = \dots$
 $3 - 2 = \dots$
 $4 - 2 = \dots$
 $5 - 2 = \dots$
 $6 - 2 = \dots$
 $7 - 2 = \dots$
 $8 - 2 = \dots$
 $9 - 2 = \dots$
 $10 - 2 = \dots$

Complète avec le signe > ou < :

8 ... 12

17 ... 16

31 ... 21

24 ... 32

36 ... 38

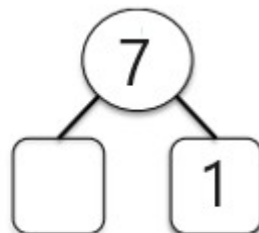
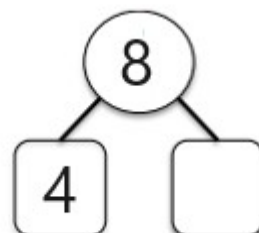
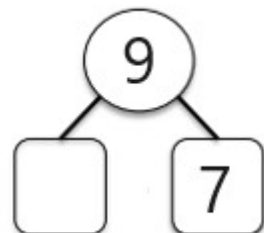
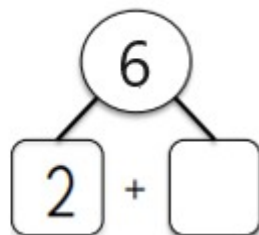
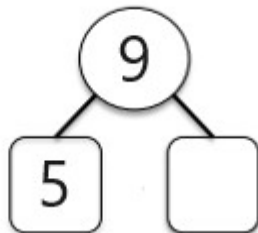
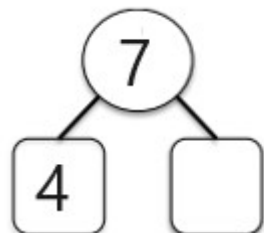
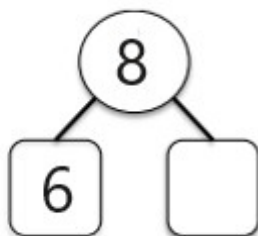
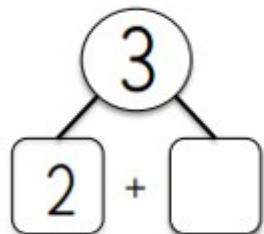
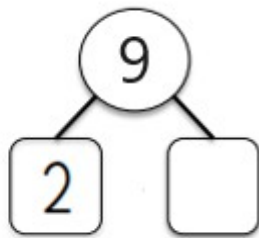
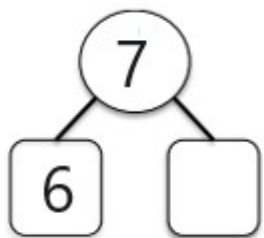
34 ... 11

19 ... 18

6 ... 37

17 ... 28

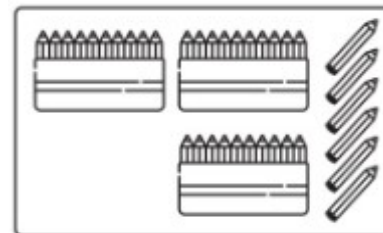
39 ... 25



Savoir par cœur

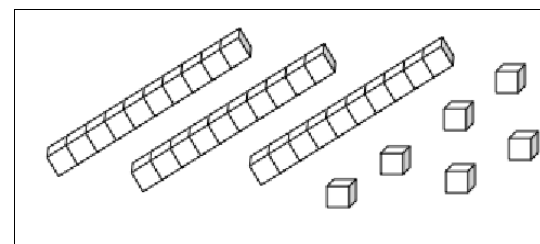
$1 + \dots = 8$
 $2 + \dots = 8$
 $3 + \dots = 8$
 $4 + \dots = 8$
 $5 + \dots = 8$
 $6 + \dots = 8$
 $7 + \dots = 8$

Colorie ce qui fait 36 :




$10 + 10 + 10 + 6$


$30 + 6$



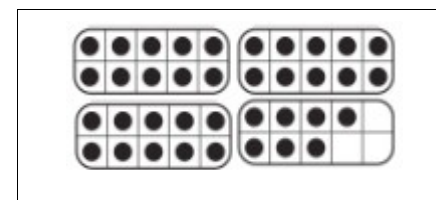
$10 + 10 + 10 + 10 + 6$



3 dizaines
 6 unités



$30 + 1$



Savoir par cœur

$1 + 3 = \dots$
 $2 + 3 = \dots$
 $3 + 3 = \dots$
 $4 + 3 = \dots$
 $5 + 3 = \dots$
 $6 + 3 = \dots$
 $7 + 3 = \dots$
 $8 + 3 = \dots$
 $9 + 3 = \dots$
 $10 + 3 = \dots$

Lire les nombres :

15 _ 40 _ 11 _ 28 _ 30

14 _ 12 _ 9 _ 44 _ 31

13 _ 22 _ 46 _ 35 _ 19

Savoir par cœur

$$3 - 3 = \dots$$

$$4 - 3 = \dots$$

$$5 - 3 = \dots$$

$$6 - 3 = \dots$$

$$7 - 3 = \dots$$

$$8 - 3 = \dots$$

$$9 - 3 = \dots$$

$$10 - 3 = \dots$$

$$11 - 3 = \dots$$

Complète avec le signe $>$ ou $<$:

48 ... 12 47 ... 46

31 ... 21 24 ... 32

46 ... 38 34 ... 11

19 ... 18 6 ... 47

17 ... 28 39 ... 25

Range ces nombres du plus petit au plus grand :

13 _ 22 _ 46 _ 35 _ 19

... $<$... $<$... $<$... $<$...

